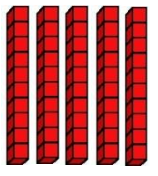
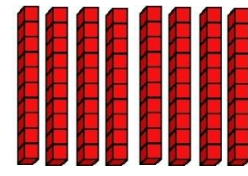
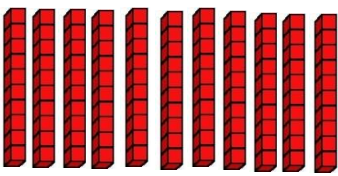


Exercice : complète comme le modèle.

		
5 dizaines	... dizaines	... dizaines
$5 \times 10 = 50$	$\dots \times 10 = \dots$	$\dots \times 10 = \dots$

Exercice :

$$7 \times 10 = \dots \quad 4 \times 10 = \dots \quad 9 \times 10 = \dots \quad 11 \times 10 = \dots$$

$$12 \times 10 = \dots \quad 16 \times 10 = \dots \quad 27 \times 10 = \dots \quad 56 \times 10 = \dots$$

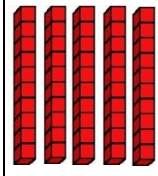
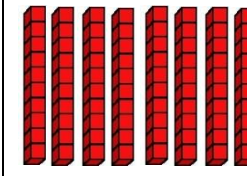
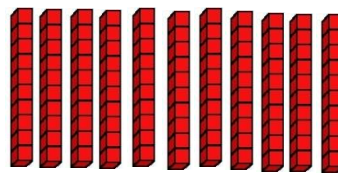
Exercice :

$$5 \times \dots = 50 \quad 8 \times \dots = 80 \quad 15 \times \dots = 150$$

$$\dots \times 10 = 350 \quad 10 \times \dots = 420 \quad \dots \times 10 = 670$$

$$12 \times 3 = \quad 21 \times 5 = \dots \quad 32 \times 4 = \dots$$

Exercice : complète comme le modèle.

		
5 dizaines	... dizaines	... dizaines
$5 \times 10 = 50$	$\dots \times 10 = \dots$	$\dots \times 10 = \dots$

Exercice :

$$7 \times 10 = \dots \quad 4 \times 10 = \dots \quad 9 \times 10 = \dots \quad 11 \times 10 = \dots$$

$$12 \times 10 = \dots \quad 16 \times 10 = \dots \quad 27 \times 10 = \dots \quad 56 \times 10 = \dots$$

Exercice :

$$5 \times \dots = 50 \quad 8 \times \dots = 80 \quad 15 \times \dots = 150$$

$$\dots \times 10 = 350 \quad 10 \times \dots = 420 \quad \dots \times 10 = 670$$

$$12 \times 3 = \quad 21 \times 5 = \dots \quad 32 \times 4 = \dots$$